



# Comparamos dos cantidades. Misión "engañar al dragón".

$\begin{array}{c} \vdots \\ \times \end{array}$  1 \_\_\_\_\_ =




$\begin{array}{c} \vdots \\ \times \end{array}$  1 \_\_\_\_\_ =




---

$\begin{array}{c} \vdots \\ \times \end{array}$  1 \_\_\_\_\_ =




$\begin{array}{c} \vdots \\ \times \end{array}$  1 \_\_\_\_\_ =




---

$\begin{array}{c} \vdots \\ \times \end{array}$  1 \_\_\_\_\_ =




$\begin{array}{c} \vdots \\ \times \end{array}$  1 \_\_\_\_\_ =




---


$\begin{array}{c} \vdots \\ \times \end{array}$  1 \_\_\_\_\_ =




$\begin{array}{c} \vdots \\ \times \end{array}$  1 \_\_\_\_\_ =




# Comparamos dos cantidades. Misión "engañar al dragón".

<input type="text"/>	<input type="checkbox"/>	$\begin{matrix} \vdots \\ \times \end{matrix}$	1 _____ =	<input type="text"/>	<input type="checkbox"/>
					

---

<input type="text"/>	<input type="checkbox"/>	$\begin{matrix} \vdots \\ \times \end{matrix}$	1 _____ =	<input type="text"/>	<input type="checkbox"/>
					

---

<input type="text"/>	<input type="checkbox"/>	$\begin{matrix} \vdots \\ \times \end{matrix}$	1 _____ =	<input type="text"/>	<input type="checkbox"/>
					

---

<input type="text"/>	<input type="checkbox"/>	$\begin{matrix} \vdots \\ \times \end{matrix}$	1 _____ =	<input type="text"/>	<input type="checkbox"/>
